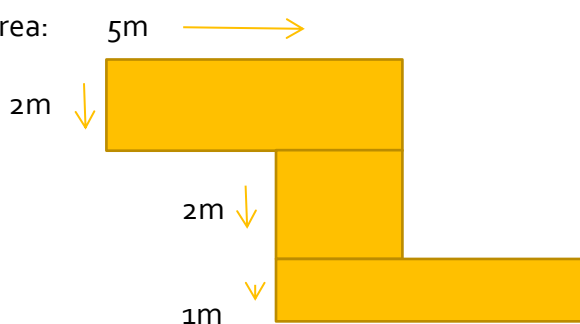




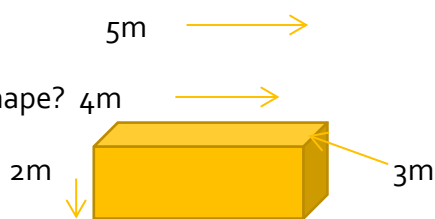
This resource is for Maths Level 3 approximate age of 10-12 years old.

#### WORKSHEET 1

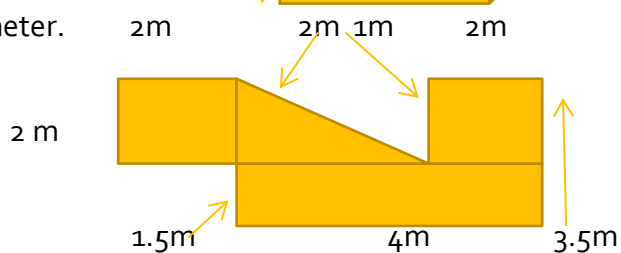
1. Find the area:



2. What is the volume of this shape?



3. Find the perimeter.



4. A farmer has 36 sheep and he has 3 paddocks. He wants to distribute the sheep evenly into the 3 paddocks. Work out how many sheep are in each paddock.



# Mackay Tutoring

5. Write all of the possible ways you can think of to get the answer 5.  $-$ ;  $+$ ;  $\div$ ;  $\times$ . (show in number sentences)

---

---

---

6. What is the quotient of 56 and 7? \_\_\_\_\_

7. What is the product of 9 and 6? \_\_\_\_\_

8. Find the sum of 2,3,4 and 5. \_\_\_\_\_

9. Use mental maths (and write down your strategies) to solve:

a)  $64+16=$

b)  $942+75=$

c)  $642+928=$

10.  $42$  \_\_\_\_\_  $7$  equals 6. (Write the word to solve this equation)

Play the dice Mental Maths Game once you have finished 